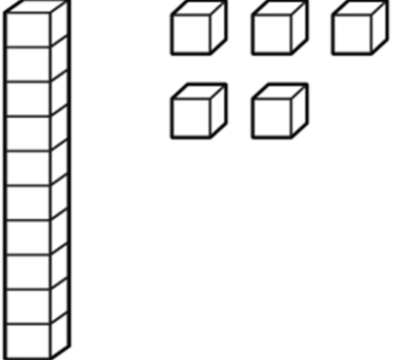


Maths

Topic: Numbers: Units & Tens

1. I count and I colour the correct number.

a)

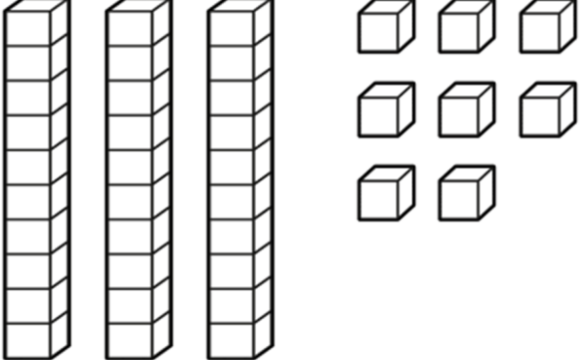


23

15

18

b)

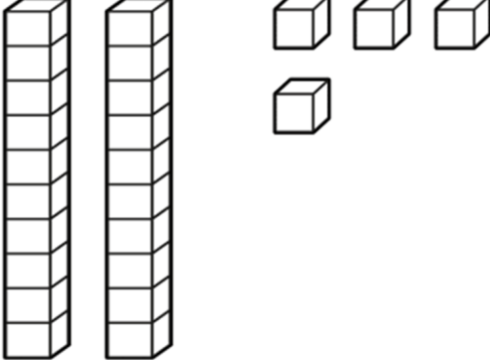


19

21

38

c)



24

11

6

2. I write the correct numeral in the space provided.

a) $13 = \underline{1}$ ten and $\underline{3}$ units

b) $17 = \underline{1}$ ten and $\underline{7}$ units

c) $25 = \underline{2}$ tens and $\underline{5}$ units

d) $28 = \underline{2}$ tens and $\underline{8}$ units

e) $39 = \underline{3}$ tens and $\underline{9}$ units

f) $31 = \underline{3}$ tens and $\underline{1}$ unit

g) $46 = \underline{4}$ tens and $\underline{6}$ units

3. I write the correct numeral in the space provided.

a) 2 tens and 6 units = $\underline{26}$

b) 3 tens and 7 units = $\underline{37}$

c) 1 ten and 3 units = $\underline{13}$

d) 4 tens and 1 unit = $\underline{41}$

e) 6 tens and 4 units = $\underline{64}$

f) 2 tens and 2 units = $\underline{22}$

g) 5 tens and 4 units = $\underline{54}$

4. I complete the ten-frames.

a)

16	●	●	●	●	●	●	●	●	●	●
	●	●	●	●	●					
	ten					units				

b)

13	●	●	●	●	●	●	●	●		
	●	●	●	●	●					
	ten					units				

c)

19	●	●	●	●	●	●	●	●	●	●
	●	●	●	●	●	●	●	●	●	
	ten					units				

d)

15	●	●	●	●	●	●	●	●	●	●
	●	●	●	●	●					
	ten					units				