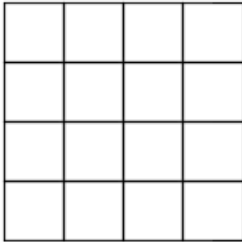


Name: .....

Topic: **Area in square units**

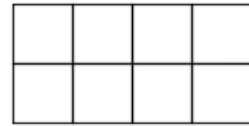
1. Find the area of the shapes below.

(a)




Answer: ..... square units

(b)



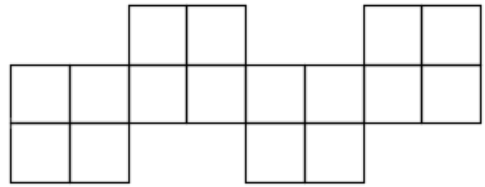
Answer: ..... square units

(c)




Answer: ..... square units

(d)



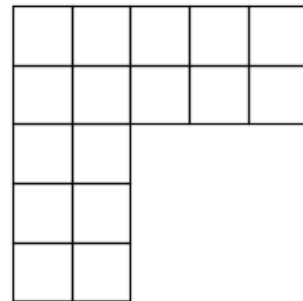
Answer: ..... square units

(e)



Answer: ..... square units

(f)



Answer: ..... square units